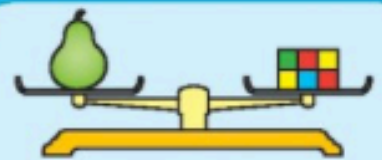



Weight: heavier or lighter



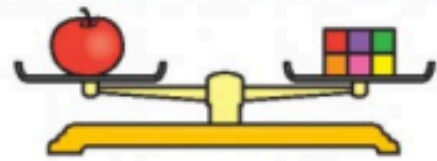
Count the number of cubes on each balance. Then **write** which object is heavier and which object is lighter.

a

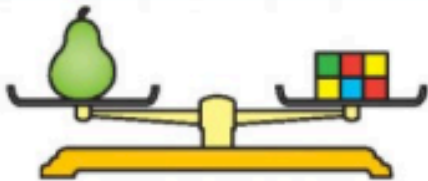


The banana is heavier than the apple.

The apple is lighter than the banana.

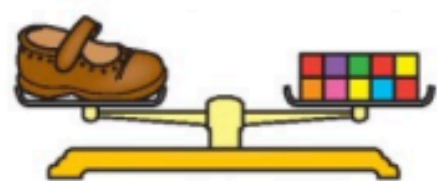


b

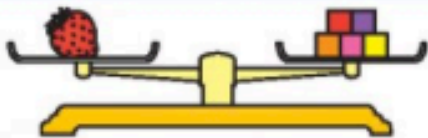


The pear is _____ than the shoe.

The shoe is _____ than the pear.

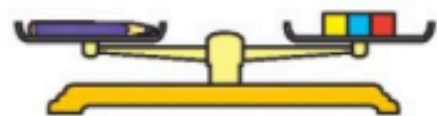


c

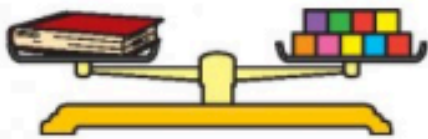


The strawberry is _____ than the pencil.

The pencil is _____ than the strawberry.

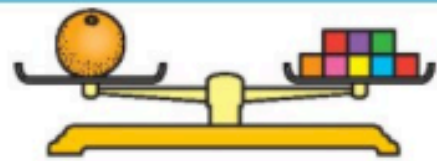


d



The book is _____ than the orange.

The orange is _____ than the book.



Write.

The _____ is the heaviest of all.

The _____ is the lightest of all.

The _____ and _____ weigh the same.

