

Wednesday

1. Write the number that comes after 4.

2. Match. **spring** • 
autumn • 

3. How many?



4. Colour 3 chicks.



5. Colour the sets that have the same amount.



6. Which set has more?



7. Count. Add. Write.



$$\underline{\quad} + \underline{\quad} = \underline{\quad}$$

8. Ring the empty glass.



Count. Add. Write.

9. $4 + \underline{\quad} = \underline{\quad}$


10. $3 + \underline{\quad} = \underline{\quad}$

/10

Thursday

1. Fill in the missing numbers.

1, 2, , 4,

2. Match. **spring** • 
autumn • 

3. Write the number that comes before 3.


4. Colour the coins needed to buy the orange.



5. Colour the rectangles.




6. Write. Colour the correct number of cats.



7. Write the numeral four.

8. Colour the taller tree.



9. How many green fish are in the bowl?



10. How many red and yellow fish are in the bowl?

/10