


Wednesday



1. Write the number that comes after 2.

2. Match. **summer** • 
winter • 


3. How many? 

4. Colour the sets that have the same amount.



5. Colour the set that has more. (a)  (b) 

6. Count. Add. Write.



$$\underline{\quad} + \underline{\quad} = \underline{\quad}$$

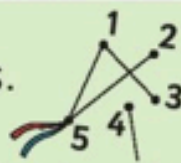
7. Ring the glass that is full.



8. Count and write the correct number.



9. Join the dots.




10. Colour the child in first place blue.



/10

Thursday


1. How many? 

2. Match. **summer** • 
winter • 

3. Write the number that comes before 4.

4. Colour the coins needed to buy the banana.



5. Colour the squares. 

6. Count and write the correct number.



7. Write the numeral two.

8. Count. Add. Write.



$$\underline{\quad} + \underline{\quad} = \underline{\quad}$$



9. Start at 2. Jump on 1. What number do you land on?

10. Start at 1. Jump on 3. What number do you land on?

/10